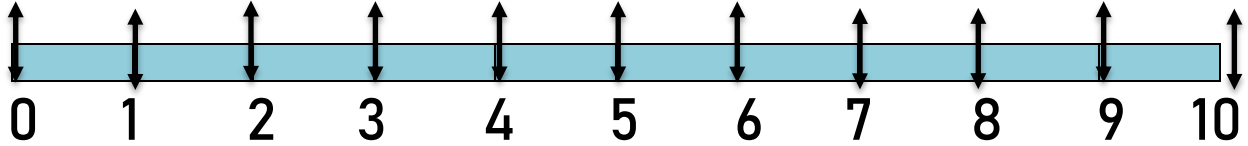




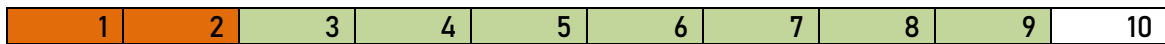
Zahlenstrahl bis 10



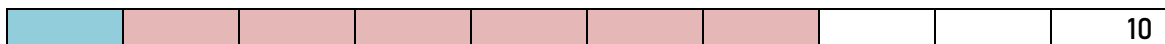
Jetzt rechnen wir am Zahlenstrahl?



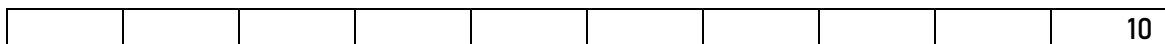
$$3 + 5 = 8$$



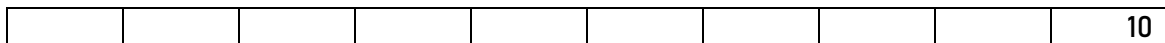
$$2 + 7 =$$



$$1 + 6 =$$



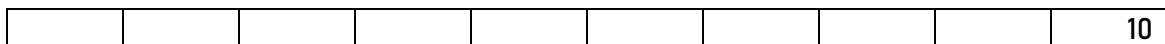
$$2 + 4 =$$



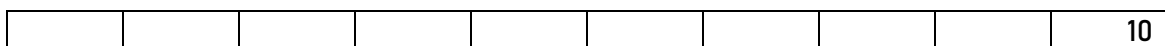
$$8 + 1 =$$



$$3 + 4 =$$



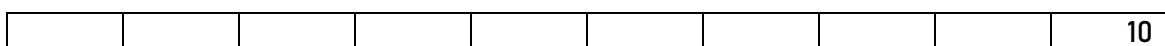
$$2 + 6 =$$



$$1 + 5 =$$



$$5 + 5 =$$



$$2 + 3 =$$